

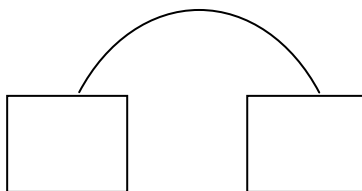
Karta pracy nr 4

.....

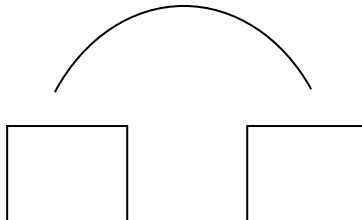
(imię i nazwisko)

1. Przedstaw działania na grafach.

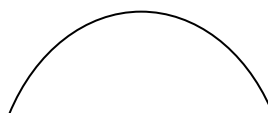
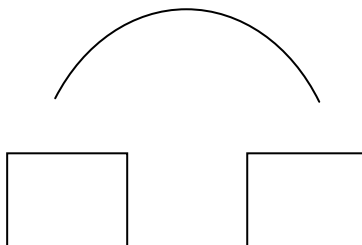
$2 \times 4 =$



$2 \times 9 =$



$5 \times 4 =$



4 x 4 =

